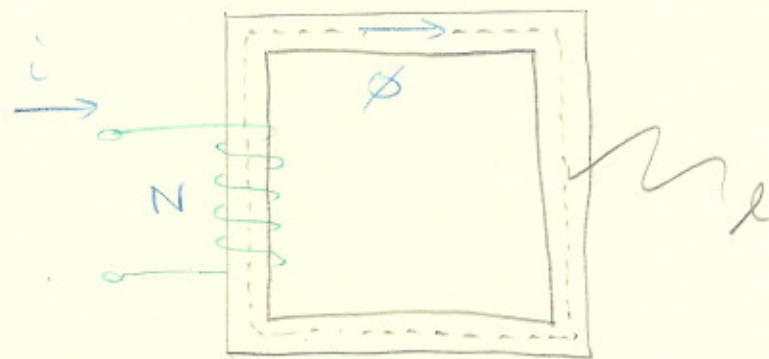


Magnetic Circuits

$A$  : cross sectional area

$l$  : mean length

Assumptions: No leakage flux  
Uniform flux density.

$\Phi$  : flux

Ampere's Law

$$\oint \vec{H} \cdot d\vec{l}$$

$$\oint \vec{H} \cdot d\vec{l} = Ni \quad \left. \vphantom{\oint \vec{H} \cdot d\vec{l}} \right\} \text{much simpler}$$

Note : Polarity of magnetomotive force ( $\oint \vec{H} \cdot d\vec{l}$ ) can be determined by right hand rule

H: magnetic field intensity. (A/m)

B: flux density (wb)

$\phi$ : flux (wb/m<sup>2</sup>)

Some other relationships

$$\vec{B} = \mu \vec{H}$$

magnetic permeability.  
field intensity.

$$\phi = \int_S \vec{B} \cdot d\vec{A} = BA$$

$$\mu = \mu_0 \mu_r$$

constants ( $4\pi \times 10^{-7} \text{ H/m}$ )  
relative permeability.

Back to the magnetic circuit....

$$\mathcal{F} = Ni$$

$$\mathcal{F} = \oint H dl$$

$$= \oint \frac{B}{\mu} dl$$

$$= \frac{B}{\mu} \oint dl$$

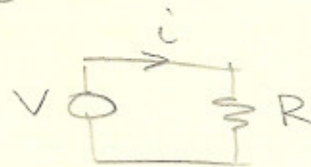
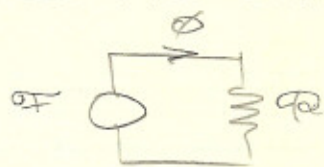
$$= \frac{Bl}{\mu}$$

$$= \frac{l}{\mu A} \phi$$

$$= \mathcal{R} \phi$$

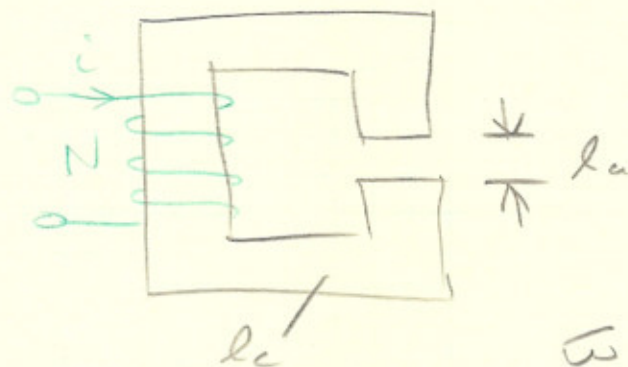
$\mathcal{R}$ : reluctance. ( $\frac{A \cdot t}{wb}$ )

Magnetic circuits behave in the same manner as electric circuits



All relations of series and parallel still apply.

EX



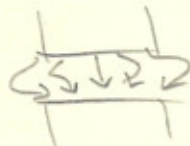
$$\begin{aligned} N &= 500 \\ \mu_r &= 70,000 \\ B_c &= 1 \text{ wb/m}^2 \\ d &= 3 \text{ cm (depth)} \\ l_a &= 0.05 \text{ cm} \\ l_c &= 30 \text{ cm} \end{aligned}$$

$\omega$  square cross sectional area

Find  $R_c, R_a, \phi$ , &  $i$

$$A = 0.009 \text{ m}^2$$

Note: Fringing: in reality the flux is not constant through the air



Ignored in most of our cases.

$$R_c = \frac{l_c}{\mu A} = \frac{l_c}{\mu_0 \mu_r d^2} = 3789.4 \frac{\text{A} \cdot \text{t}}{\text{wb.}}$$

$$R_a = \frac{l_a}{\mu A} = \frac{l_a}{\mu_0 d^2} = 442100 \frac{\text{A} \cdot \text{t}}{\text{wb.}}$$


$$\phi = B_c A = 0.0009 \text{ wb.}$$

$$R_T = R_c + R_a = 445890 \frac{\text{A} \cdot \text{t}}{\text{wb}}$$

$$\mathcal{F} = \phi R_T = Ni$$

$$i = \frac{\phi R_T}{N} = 0.8026 \text{ A}$$



EX

A: cross section area

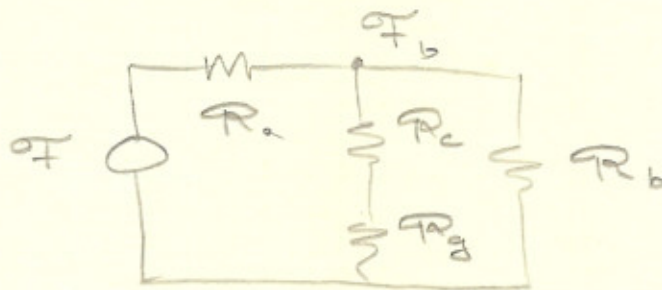
Find  $\phi_a, \phi_b, \phi_c$

$$R_a = \frac{l_a}{\mu_r \mu_0 A}$$

$$R_c = \frac{l_c}{\mu_r \mu_0 A}$$

$$R_b = \frac{l_b}{\mu_r \mu_0 A}$$

$$R_g = \frac{l_g}{\mu_0 A}$$



$$R_T = R_a + (R_c + R_g) \parallel R_b$$

$$\phi_a = \frac{\Phi}{R_T}$$

$$\begin{aligned} \Phi_b &= \Phi - \phi_a R_a \\ &= \phi_a [(R_c + R_g) \parallel R_b] \end{aligned}$$

$$\phi_b = \frac{\Phi_b}{R}$$

$$\phi_c = \frac{\Phi_b}{R_c + R_g}$$